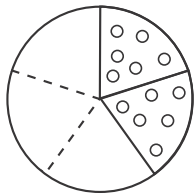


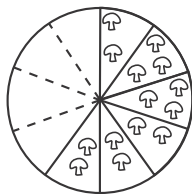
1. What is 661,239 rounded to the nearest ten thousand?

- (A) 670,000
- (B) 662,000
- (C) 661,000
- (D) 660,000

2. The two trays of pizza below show the amount of pizza left over after the fourth-grade party.



Pepperoni



Mushroom

Which of the following compares the amount of pepperoni pizza left over to the amount of mushroom pizza left over?

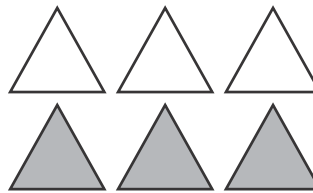
- (A) $\frac{2}{5} > \frac{6}{10}$
- (B) $\frac{6}{10} < \frac{2}{5}$
- (C) $\frac{2}{5} = \frac{6}{10}$
- (D) $\frac{6}{10} > \frac{2}{5}$

3. There are 63 students in the school band. At a band concert, Jerome saw that equal numbers of band members were seated in 3 different sections. How many band members were seated in each section?

- (A) 21 band members
- (B) 14 band members
- (C) 7 band members
- (D) 3 band members

4. In January of 2013, Mr. Edwards turned 64 years old. In what year was Mr. Edwards born?

5. In the picture, $\frac{3}{6}$ of the triangles are shaded. Write a fraction that is equivalent to $\frac{3}{6}$.



6. Compare $\frac{7}{8}$ and $\frac{2}{6}$.

7. Write 12,249 in expanded form, and write the number name.

8. Find $346,001 + 209,499$.
